

THEORY 1 st - IN-SEM EXAMINATION			
SESSION: 2022-23 (SUMMER SEMESTER)			
B.Voc.	Semester	1 st	
Course Name	Applied Mathematics		
Course Code	GEN1103		
Date			
Name of the Student		Reg. No.	

INSTRUCTIONS

- Maximum Marks: **20**
- Duration of Examination: **01 Hour**
- Attempt all questions.
- Use of Calculator is strictly prohibited.

1. Section A

05×1 = 05

Q1. Empty set is a _____.

- (a) Infinite Set (c) Finite Set
(b) Unknown set (d) Universal set

Q2. The number of elements in the Power set P(A) of the set $A = \{1, 2, 3\}$ is:

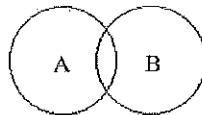
- (a) 8 (c) 4
(b) 2 (d) none of the these

Q3. Which of the following two sets are equal?

- (a) $A = \{1, 2\}$ and $B = \{1\}$ (c) $A = \{1, 2\}$ and $B = \{1, 2, 3\}$
(b) $A = \{1, 2, 3\}$ and $B = \{2, 1, 3\}$ (d) $A = \{1, 2, 4\}$ and $B = \{1, 2, 3\}$

Q4. In the given Venn diagram, is set A subset of set B?

- (a) True
(b) False



Q5. $\lim_{x \rightarrow 1} 12x^2(x+2) = ?$

- (a) 56 (c) 36
(b) 46 (d) 2

2. Section B

03×02 = 06

Q6. If $U = \{1, 2, 3, 4, 5, 6, 7, 8, 9, 10\}$ and $A = \{1, 2, 6, 7, 9\}$, find A' using Venn Diagram.

Q7. Write the following sets into roster form:

- (i) $A = \{x: x \text{ is an integer and } -6 < x < 6\}$
(ii) $B = \{x: x \text{ is an even natural number less than } 15\}$

Q8. Write the following sets into set-builder form:

- (i) $A = \{2, 4, 8, 16\}$
(ii) $B = \{1, 2, 3, 6\}$

Q9. Write the power set of the following sets:

(i) $A = \{p, q, r, s\}$

(ii) $B = \{2, \{4, 6\}, 8\}$

Q10. Evaluate $\lim_{x \rightarrow 2} \frac{x^2 - 3x + 2}{x^2 - 6x + 8}$.

Q11. In a class of 50 students, 10 take Guitar lessons and 20 take singing classes, and 4 take both. Find the number of students who don't take neither Guitar nor singing lessons. (Using Venn Diagram)

THEORY 1 st - IN-SEM EXAMINATION			
SESSION: 2022-23 (SUMMER SEMESTER)			
B.Voc.	Semester	1 st	
Course Name	Applied Mathematics		
Course Code	GEN1103		
Date			
Name of the Student		Reg. No.	

INSTRUCTIONS

- Maximum Marks: **20**
- Duration of Examination: **01 Hour**
- Attempt all questions.
- Use of Calculator is strictly prohibited.

1. Section A

05×1 = 05

Q1. Empty set is a _____.

- (a) Infinite Set (c) Finite Set
(b) Unknown set (d) Universal set

Q2. The number of elements in the Power set P(A) of the set $A = \{1, 2, 3\}$ is:

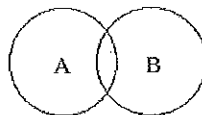
- (a) 8 (c) 4
(b) 2 (d) none of the these

Q3. Which of the following two sets are equal?

- (a) $A = \{1, 2\}$ and $B = \{1\}$ (c) $A = \{1, 2\}$ and $B = \{1, 2, 3\}$
(b) $A = \{1, 2, 3\}$ and $B = \{2, 1, 3\}$ (d) $A = \{1, 2, 4\}$ and $B = \{1, 2, 3\}$

Q4. In the given Venn diagram, is set A subset of set B?

- (a) True
(b) False



Q5. $\lim_{x \rightarrow 1} 12x^2(x+2) = ?$

- (a) 56 (c) 36
(b) 46 (d) 2

2. Section B

03×02 = 06

Q6. If $U = \{1, 2, 3, 4, 5, 6, 7, 8, 9, 10\}$ and $A = \{1, 2, 6, 7, 9\}$, find A' using Venn Diagram.

$A' = \{3, 4, 5, 8, 10\}$

Q7. Write the following sets into roster form:

- (i) $A = \{x: x \text{ is an integer and } -6 < x < 6\}$, $A = \{-5, -4, -3, -2, -1, 0, 1, 2, 3, 4, 5\}$
(ii) $B = \{x: x \text{ is an even natural number less than } 15\}$, $A = \{2, 4, 6, 8, 10, 12, 14\}$

Q8. Write the following sets into set-builder form:

- (i) $A = \{2, 4, 8, 16\}$, $A = \{x: x=2^n, \text{ where } n \text{ is natural number and } n < 5\}$

(ii) $B = \{1, 2, 3, 6\}$, $\mathbf{B} = \{x: x \text{ is the factor of } 6\}$

3. Section C

03×03 = 09

Q9. Write the power set of the following sets:

(i) $A = \{p, q, r, s\}$ **16**

(ii) $B = \{2, \{4, 6\}, 8\}$ **8**

Q10. Evaluate $\lim_{x \rightarrow 2} \frac{x^2 - 3x + 2}{x^2 - 6x + 8}$. **0**

Q11. In a class of 50 students, 10 take Guitar lessons and 20 take singing classes, and 4 take both. Find the number of students who don't take neither Guitar nor singing lessons. (Using Venn Diagram), **24**

THEORY 1 st - IN-SEM EXAMINATION			
SESSION: 2022-23 (SUMMER SEMESTER)			
B.Voc	Semester	1 st	
Course name / Module	Elementary Mathematics		
Course Code	GEN1104		
Date			
Name of the Student		Reg. No.	

INSTRUCTIONS

- Maximum Marks: **20**
- Duration of Examination: **01 Hour**
- Attempt all questions.

1. Section A

05×1 = 05

Q1. 2.043 km = ___ Meter?

- (A) 2043 (C) 2430
(B) 243 (D) 20.43

Q2. Which measurement would you pick when measuring the size of your bed?

- (A) Mass (C) Capacity
(B) Length (D) None of the above

Q3. Which will be the decimal equivalent for the binary number 1101110?

- (A) 102 (C) 110
(B) 111 (D) 117

Q4. What number does 'D' denotes in hexadecimal numbers?

- (A) 10 (C) 12
(B) 11 (D) 13

Q5. 1.3 mm = ___ micron?

- (A) 1300 (C) 13
(B) 130 (D) 13000

2. Section B

03×02 = 06

Q6. Calculate the sum of lengths: 21 m 13 cm, 33 m 55 cm and 45 m 6 cm.

Q7. A pile of 10 books is 10 cm high. What is the thickness of each book?

Q8. What is a Ray?

3. Section C

03×03 = 09

Q9. Define the following.

- a. Vertically opposite angle c. adjacent angle
b. Corresponding angle

Q10. Convert the binary number 1010.11 to a decimal number.

Q11. Convert the Binary number 1100.11011 to a Hexadecimal number.

THEORY 1 st - IN-SEM EXAMINATION			
SESSION: 2022-23(SUMMER SEMESTER)			
B.Voc		Semester	1 st
Course name / Module	Elementary Mathematics		
Course code	GEN1104		
Date			
Name of the Student		Reg. No.	

INSTRUCTIONS

- Maximum Marks: **20**
- Duration of Examination: **01 Hour**
- Attempt all questions.

1. Section A (05 objective type questions, each question carries 01 mark)

05×1 = 05

Q.1. 2.043 km = Meter?

- (A) 2043
- (B) 243
- (C) 2430
- (D) 20.43

Q.2. Which measurement would you pick when measuring the size of your bed?

- (A) Mass
- (B) Length
- (C) Capacity
- (D) None of the above

Q.3. Which will be the decimal equivalent for the binary number 1101110?

- (A) 102
- (B) 111
- (C) 110
- (D) 117

Q.4. What number does 'D' denotes in hexadecimal numbers?

- (A) 10
- (B) 11
- (C) 12
- (D) 13

Q.5. 1.3 mm = micron?

- (A) 1300
- (B) 130
- (C) 13
- (D) 13000

2. Section B (03 short answer type questions, each question carries 02 marks)**03×02 = 06**

Q.6. Calculate the sum of lengths: 21 m 13 cm, 33 m 55 cm and 45 m 6 cm.

Answer –

$$\begin{aligned} &21 \text{ m } 13 \text{ cm} + 33 \text{ m } 55 \text{ cm} + 45 \text{ m } 6 \text{ cm} \\ &= (21 + 33 + 45) \text{ m } (13 + 55 + 6) \text{ cm} \\ &= 99 \text{ m } 74 \text{ cm} \end{aligned}$$

Therefore, the sum of given lengths = 99 m 74 cm.

Q.7. A pile of 10 books is 10 cm high. What is the thickness of each book?

Answer –

As we know,

$$1 \text{ cm} = 10 \text{ mm}$$

Given that the height of a pile of 10 books = 10 cm

$$10 \text{ books} = 10 \text{ cm}$$

$$= 10 \times 10 \text{ mm}$$

$$= 100 \text{ mm}$$

$$1 \text{ book} = 100/10$$

$$= 10 \text{ mm}$$

Therefore, the thickness of each book = 10 mm.

Q.8. What Is a Ray?

Answer –

The definition of ray in math is that it is a part of a line that has a fixed starting point but no endpoint. It can extend infinitely in one direction. Since a ray has no endpoint, we can't measure its length.

3. Section C (03 long type questions, each question carries 03 marks)**03×03 = 09**

Q.9. Define the following.

- a. Vertically opposite angle
- b. Corresponding angle
- c. adjacent angle

Answer –

Vertical Angles (Vertically Opposite Angles) When two lines intersect each other, then the opposite angles, formed due to intersection are called vertical angles or vertically opposite angles. A pair of vertically opposite angles are always equal to each other.

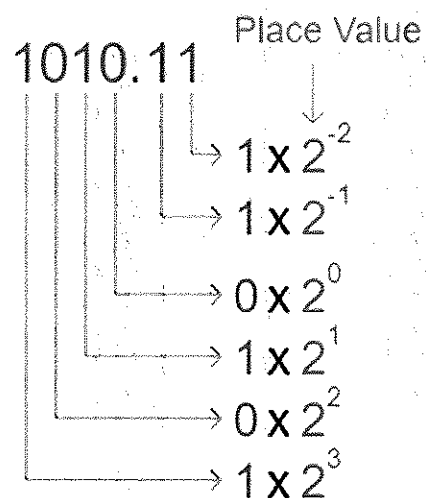
the angles which occupy the same relative position at each intersection where a straight line crosses two others. If the two lines are parallel, the corresponding angles are equal.

The two angles are said to be adjacent angles when they share the common vertex and side. The endpoint of the rays, forming the sides of an angle, is called the vertex of an angle. Adjacent angles can be a complementary angle or supplementary angle when they share the common vertex and side.

Q.10. Convert the binary number 1010.11 to a decimal number.

Answer -

DESCRIPTIONS



We multiply each binary digit with its place value and add the products.

$$(1010.11)_2 = (1 \times 2^3) + (0 \times 2^2) + (1 \times 2^1) + (0 \times 2^0) + (1 \times 2^{-1}) +$$

$$(1 \times 2^{-2})$$

$$= 8 + 2 + \frac{1}{2} + \frac{1}{4}$$

$$= (10.75)_{10}$$

Q.11. Convert the Binary number 1100.11011 to a Hexadecimal number.

Answer -

DESCRIPTIONS

$\boxed{1100} . \boxed{1101} \boxed{1000}$
↓ ↓ ↓
C D 8

Starting from the binary point, we partition the binary number into groups of four bits.

In the **integer part**, we proceed to the left.

In the **fractional part**, we proceed to the right. To complete the rightmost group of bits, we append three zeros to the right.

- $(1100)_2 = (C)_{16}$

- $(1101)_2 = (D)_{16}$

- $(1000)_2 = (8)_{16}$

We convert each group of binary numbers to octal and write them in the same order.

$$(1100.11011)_2 = (C.D8)_{16}$$

THEORY 1 st - IN-SEM EXAMINATION			
SESSION: 2022-23(SUMMER SEMESTER)			
B.Voc	Semester	1st	
Course Name	English Language & Comprehension I		
Course Code	GEN1105		
Date			
Name of the Student		Reg. No.	

INSTRUCTIONS
<ul style="list-style-type: none"> • Maximum Marks: 20 • Duration of Examination: 01 Hour • Attempt all questions.

1. Section A	05×1 = 05
--------------	-----------

Q1. Fill in the blank with suitable noun:

The table is made of _____. (wood/woods)

Q2. Fill in the bank with suitable pronoun:

Ramila has hurt _____. (her/herself)

Q3. Write True or False for the given sentence:

Hanumanthappa was a coolie's son. (True/False)

Q4. Fill in the blank with the suitable article (a, an, the):

Anshi is ___ honest girl.

Q5. _____ is the writer of the short story titled- Honesty comes from the Heart.

- | | |
|-------------------|-----------------|
| (a) Krishna Murty | (c) R K Narayan |
| (b) Sudha Murty | (d) R N Tagore |

2. Section B	03×02 = 06
--------------	------------

Q6. Explain the given lines with reference to the context:

Where will he have the money to come so far? If you want him to come here, send some money for his bus fare plus a little extra to buy himself a decent set of clothes.

Q7. Underline the nouns in the given sentences and classify the types of nouns:

- Kolkata is the capital of West Bengal.
- Laughter is good for health.
- There is a huge crowd on the road.
- The police caught the thief.

Q8. Fill in the banks with suitable pronouns:

- Please give me _____hammer.(those/that)
- I will meet _____ in the evening. (her/she)
- I saw _____ in the mirror. (me/myself)
- He gave _____ a gift. (herself/her)

Q9. Write the summary of the story, Honesty comes from the Heart.

Q10. Make sentences with the following words:

- (a) Honest
- (b) Intelligent
- (c) Bright

Q11. Fill in the blanks with suitable articles (a, an, the):

- (a) They met with _____ accident.
- (b) John is looking at _____ map.
- (c) She is eating _____ orange.
- (d) We visited _____ Taj Mahal in June.
- (e) There is _____ fountain in the middle of the park.
- (f) Veer gave his friend _____ apple.

THEORY 1 st - IN-SEM EXAMINATION		
SESSION: 2022-23(SUMMER SEMESTER)		
B.Voc	Semester	1 st
Course name	English Language & Comprehension I	
Course code	GEN1105	
Date		
Name of the Student		Reg. No.

INSTRUCTIONS

- Maximum Marks: **20**
- Duration of Examination: **01 Hour**
- Attempt all questions.

Answer Key

1. Section A	05×1 = 05
---------------------	------------------

Q1. Fill in the blank with suitable noun:

(a) The table is made of _____. (**wood/woods**)

Q2. Fill in the blank with suitable pronoun:

(a) Ramila has hurt _____. (**her/herself**)

Q3. Write True or False for the given sentence:

(a) Hanumanthappa was a coolie's son. (**True/False**)

Q4. Fill in the blank with the suitable article (a, an, the):

(a) Anshi is **an** honest girl.

Q5. _____ is the writer of the short story titled- **Honesty comes from the Heart.**

(a) Krishna Murty

(c) R K Narayan

(b) Sudha Murty

(d) R N Tagore

2. Section B	03×02 = 06
---------------------	-----------------------

Q6. Explain the given lines with reference to the context:

1. *Where will he have the money to come so far? If you want him to come here, send some money for his bus fare plus a little extra to buy himself a decent set of clothes.*

These lines have been taken from the short story titled *Honesty comes from the Heart* written by Sudha Murty. Sudha Murty decides to sponsor the higher education of meritorious student – a tribal boy, Hanumanthappa who had passed his Secondary Examination with merit in spite of his low socio economic background. Sudha Murty is highly impressed of him. She writes him a post card to invite Hanumanthappa to her office at Bangalore. At that time, Sudha Murty's father speaks the above lines suggesting her to send him some money which he may require for travelling and also to buy him a new set of clothes so that he could wear them before visiting her at Bangalore.

Q7. Underline the nouns in the given sentences and classify the types of nouns:

(a) Kolkata is the capital of West Bengal.

(b) Laughter is good for health.

(c) There is a huge crowd on the road.

(d) The police caught the thief.

Answers:

- (a) Kolkata, West Bengal – Proper Noun
- (b) Laughter, health – Abstract Noun
- (c) Crowd – Collective Noun
- (d) Police, Thief – Common Noun

Q8. Fill in the banks with suitable pronouns:

- (a) Please give me _____ hammer. (those/**that**)
- (b) I will meet _____ in the evening. (**her**/she)
- (c) I saw _____ in the mirror. (me/**myself**)
- (d) He gave _____ a gift. (herself/**her**)

3. Section C	03×03 = 09
---------------------	-------------------

Q9. Write the summary of the story, Honesty comes from the Heart.

Ans. The story **Honesty comes from the Heart** is an interesting story written by Sudha Murty. It has been taken from the collection of her stories titled *Wise and the Otherwise*, published in 2006. It is about a rural tribal boy of 15 years named Hanumantappa who secures a rank in the Secondary Examination. The writer comes to know about his inability to continue his studies further from the interview published in the Newspaper due to his poor economic conditions. Therefore, she offers to sponsor his higher studies he desired to continue. Hanumantappa chooses to pursue his studies at Teachers' Training College in Bellary which was near his village which required around Rs. 300/- per month. The writer sends him a draft of an amount of Rs.1800/- sufficient for six months. Hanumantappa accepts the money with gratitude and thankfulness.

After six months, the writer remembers that she had to send Hanumantappa the expenses for the next six months and sends him the next draft. The young boy sends her the acknowledgement of the receipt of the amount. But the writer gets surprised to receive some currency notes sent back to her with a letter.

In the letter, Hanumantappa explains the reason of returning the money which remained unused for two months when he had not stayed at Bellary because of having one month holidays and a strike for a month.

This surprises Sudha Murthy as she would not have gone to find the status of the boy's stay and studies to Bellary to know about the fact of unused of money. She appreciates his honesty and realizes that Honesty cannot be taught but it comes from the heart.

Q10. Make sentences with the following words:

- (a) Honest- Ram is an **honest** boy.
- (b) Intelligent- My brother is very **intelligent**.
- (c) Bright- The day is **bright** today.

Q11. Fill in the blank with suitable article (a, an, the):

- (a) They met with **an** accident.
- (b) John is looking at **a** map.
- (c) She is eating **an** orange.
- (d) We visited **the** Taj Mahal in June.
- (e) There is **a** fountain in the middle of the park.
- (f) Veer gave his friend **an** apple.

THEORY 1st - IN-SEM EXAMINATION			
SESSION: 2022-23 (SUMMER SEMESTER)			
OPEN ELECTIVE			
Course Name	Open Access E-resources and Software		
Course Code	GEN 1114		
Date			
Name of the Student		Reg. No.	

INSTRUCTIONS			
<ul style="list-style-type: none"> • Maximum Marks: 20 • Duration of Examination: 01 Hour • Attempt all questions. 			

1. Section A	05×1 = 05
---------------------	------------------

- Q1.**is the Academic Library:
- (a) Govt Sr. Secondary School Library (c) Prisoners Library
(b) National Library of India (d) Reserve Bank of India Library
- Q2.** Which is the Integrated Library Management Software?
- (a) KOHA (c) Dspace
(b) Greenstone (d) None of the above
- Q3.**is not an Online Library information tool.
- (a) OPAC (c) INDCAT
(b) WORLDCAT (d) Excite
- Q4.** Thesis, Research Reports, Patents, Journals, magazines etc. are the:
- (a) Primary sources of information (c) Secondary sources of information
(b) Tertiary sources of information (d) None of the above
- Q5.**are to keep the user abreast of information in their area of work or interest that has recently been published.
- (a) Reference Services (c) Current awareness services
(b) Literature Search Sevices (d) Document Delivery Services

2. Section B	03×02 = 06
---------------------	-------------------

- Q6.** Explain the Fourth law of Library Science.
- Q7.** Explain the differences between Public Library and Special Library.
- Q8.** What are the secondary sources of Information? List any 5 of secondary sources of Informations.

3. Section C	03×03 = 09
---------------------	-------------------

- Q9.** What is Library Automation? Explain the need for Library automation.
- Q10.** List any 8 most Internet search engines in world and explain them.
- Q11.** What do you understand by the term library? Describe the role of libraries in Society.

Answer Key – GEN1114

1. a
2. a
3. d
4. a
5. c

6. Explain Forth law of Library Science.

There are total five laws of Library Science.

The fourth law of library science, "Save the time of the reader," means that all patrons should be able to easily locate the materials they desire quickly and efficiently. The practice of librarianship creates systems, services, workflows, guides and frameworks to the benefit of practicality to the user. Ranganathan said the fourth law in turn saves the time of the library staff through such practices as centralized classification and cataloging, documenting materials before sending them to the library that ordered them, and mechanizing methods for information retrieval.

7. Explain the Difference between Public Library and Special Library.

Public Library- A public library has been regarded as an integral part of the social framework from the very beginning. It is considered as a social agency charged with the responsibility of serving the information needs of the society. Public library is probably the one public agency to provide education to one and all within the society without the distinction of caste, colour, creed, and nationality. That is why it is called as a 'People's University.

Special Library- Special library means a library which is concerned almost exclusively with the literature of a particular subject or group of subjects. It also includes libraries with the collection of a particular form of materials.

8. Secondary Sources of Information - Information published in primary sources on a particular subject is widely scattered and is available in large number of sources like primary periodicals, technical reports, dissertations, conference papers, patents, standards and so on.

In addition, the research results are published in different languages. This makes it very difficult for a researcher to keep track of what is latest in his/her field of interest.

- Secondary Periodicals -
- Indexing Periodicals
- Abstracting Periodicals –
- Bibliographies
- Books

9. What is Library Automation. Explain the need for Library automation.

Library automation, an up-to-date method to help libraries and library patrons to effectively use library resources, is now streamlined because of computers and software. Automation is a process of using the machineries for easily working and saving the human power and time.

Need for Library Automation:

There are several reasons for automation.

A considerable saving in efforts, Time and resources involved in manual processing can be achieved.

The other reasons are:

- 1) To improve control over collection.
- 2) To have an entries control over the entire operation.
- 3) To improve the existing services as well as introduce new services.
- 4) To avoid duplicate of work.

5) To use services of the existing staff effectively.

From the library point of view automation in library is also necessary because:

- 1) Largely textual in nature.
- 2) Bibliographic record is of variable length.
- 3) A field in a record may repeat many times.
- 4) File size is usually varying large.
- 5) Updating of files are done almost every day.
- 6) To record the date accurately, special devices are required.

10. List and explain any 8 most Internet search engines in world.

Google is a popular internet search engine. It scans the Web to find Web pages that are relevant to the words you have typed in the search box.

Bing – It is an online search engine, the primary objective of Bing is **to connect users with the most relevant search results from the web**—providing easy access to quality content produced by web publishers.

- **DuckDuckGo** - DuckDuckGo is an internet search engine that emphasizes protecting searchers' privacy and avoiding the filter bubble of personalized search results. DuckDuckGo does not show search results from content farms.
- **Baidu** - Baidu, Inc. is a Chinese multinational technology company specializing in Internet-related services and products and artificial intelligence, headquartered in Beijing's Haidian District. It is one of the largest AI and Internet companies in the world.
- **Yandex** - **Yandex LLC** (Russian: Яндекс) is a Russian multinational technology company providing internet related products and services, including an internet search engine, Information Services, e-commerce, transportations, maps; and navigation, mobile applications and online advertising. It primarily serves audiences in Russia and the nearby states.
- **Twitter** - Twitter is mainly a social media platform, but it can also be a powerful search engine. If you're looking for the latest news or information about a trending topic, then nothing beats Twitter. By searching hashtags, profile handles, or simple keywords, you can get real-time updates about anything. And through Twitter, you can uncover interesting topics and resolve your customer's queries.
- **Starpage** - Start page is a Dutch search engine company that highlights privacy as its distinguishing feature. The website advertises that it allows users to obtain Google Search results while protecting users' privacy by not storing personal information or search data and removing all trackers.

11. What is library? Describe the role of Libraries in Society.

Library is a Collection of Knowledge. Library is a social agency which has been created by actual necessities in modern civilization. Library and society are interlinked and independent. Library is a social institution charged with the function of assemble, organize, preserve, socialize and serve all expressed thought embodied as manuscripts, books, periodicals, journals etc.

- Role of Library - Library and society are inter-linked and inter-dependent with each other's. Society without libraries has no significance, and libraries without society have no origin. To serve as a vehicle of social progress, the library plays a vital role:
- To assemble, organize, preserve, socialize, and serve all expressed thought embodied as manuscripts, books, periodicals, their constituents' documents, however minute, and every other similar document produced as a means for communication; and by this means;
- To help in the transmission of knowledge of the earlier generations to the later ones; and by this mean;
- To help in cumulating and further building up of knowledge from generation to generation; and in a similar way;

- To help in the contemporary development of knowledge, by the unintended and purposeless repetition of effort and the consequent wastage in the research potential of humanity; and further
- To conserve the research time of humanity by the separation of literature search from positive search; and also
- To help in the perpetual self-education of one and all; and further
- To collect together all available recorded information particularly in the form of reference books, and to socialize and serve freely all such information to each according to his needs at the moment; and by all such mean
- To increase the economic resources of humanity to the extent necessary to maintain the ever-increasing population, in comfort and free from want of any kind; and also
- To help in the mutually co-operating, and mutually tolerant peaceful co-existence of individuals, communities, and nations; and further
- To help in the elevating, self-dependent use of leisure with the aid of freely served books, pictures, sound records, and other similar materials; and also
- To help in increasing the opportunity for the spiritual awakening of one and all the members of humanity.

